

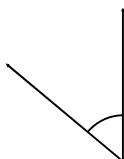
Name: _____

Date: _____

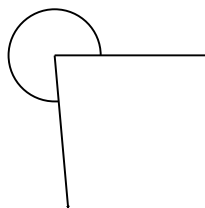
Types Of Angles

Classify and measure the angles.

1.



2.



3.



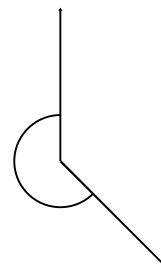
4.



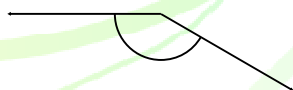
5.



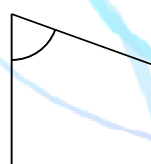
6.



7.



8.



9.



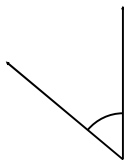
Name: _____

Date: _____

Types Of Angles

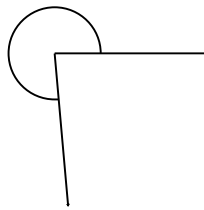
Classify and measure the angles.

1.




50° Acute

2.



275° Reflex

3.



15° Acute

4.



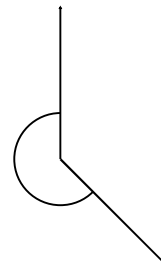
175° Obtuse

5.



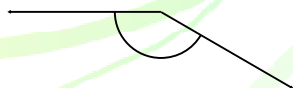
180° Straight

6.



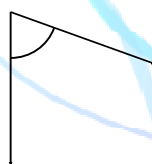
225° Reflex

7.



150° Obtuse

8.



70° Acute

9.



175° Obtuse