

Name: _____

Date: _____


Identify The Polygons

Identify the polygons.

1.




2.



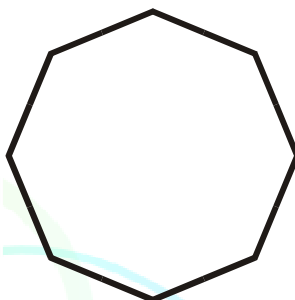
3.



4.




5.




6.



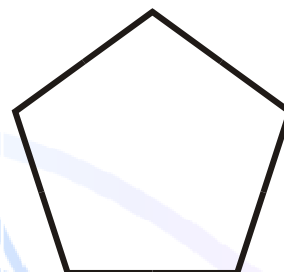
7.



8.



9.



Name: _____

Date: _____

Identify The Polygons


Identify the polygons.

1.



Parallelogram

2.




Isosceles Triangle

3.



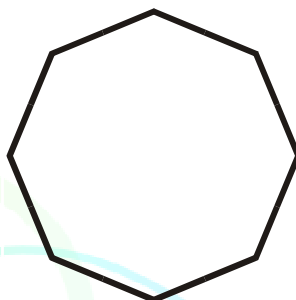
Rectangle

4.



Right Triangle

5.




Regular Octagon

6.




Scalene Triangle

7.



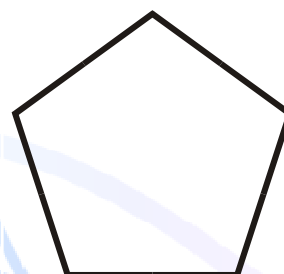
Trapezoid

8.



Square

9.



Regular Pentagon