

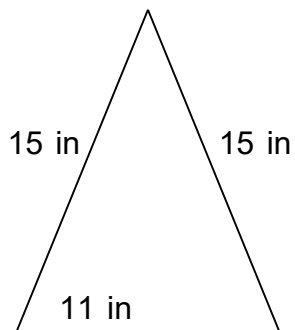
Name: _____

Date: _____

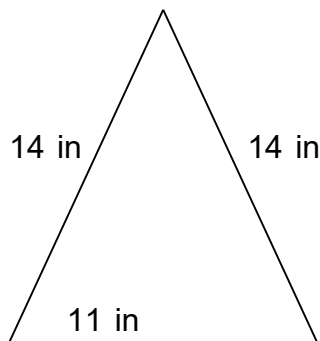
Isosceles Triangle perimeter

Find the perimeter.

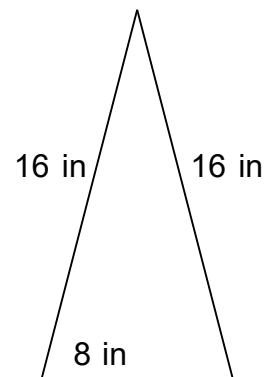
1.



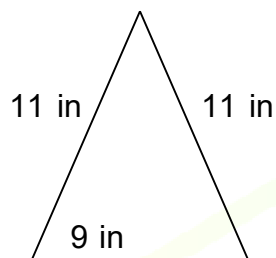
2.



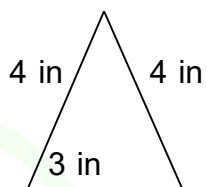
3.



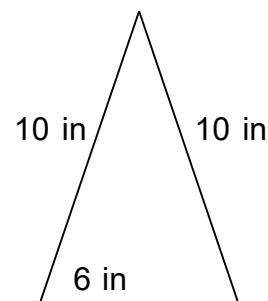
4.



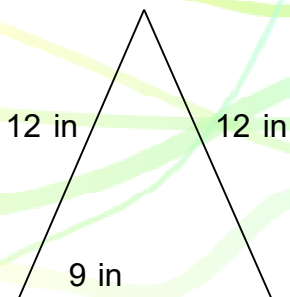
5.



6.



7.



8.



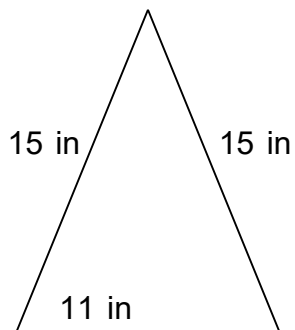
Name: _____

Date: _____

Isosceles Triangle perimeter

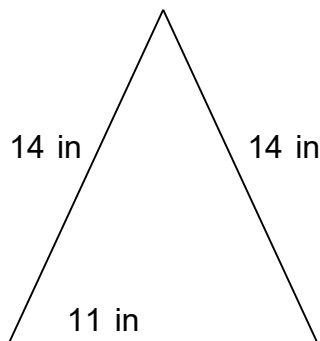
Find the perimeter.

1.



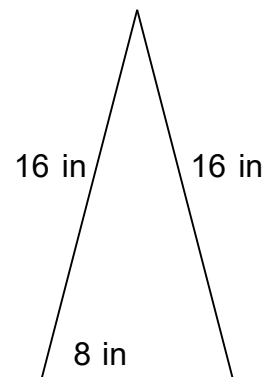
$P = 41 \text{ in}$

2.



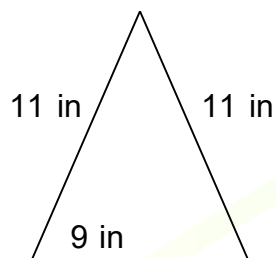
$P = 39 \text{ in}$

3.



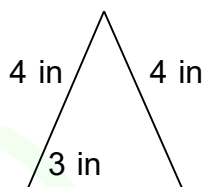
$P = 40 \text{ in}$

4.



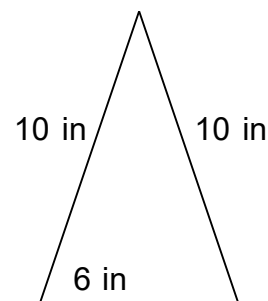
$P = 31 \text{ in}$

5.



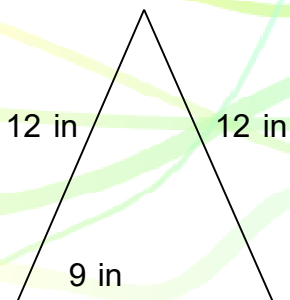
$P = 11 \text{ in}$

6.



$P = 26 \text{ in}$

7.



$P = 33 \text{ in}$

8.



$P = 38 \text{ in}$