

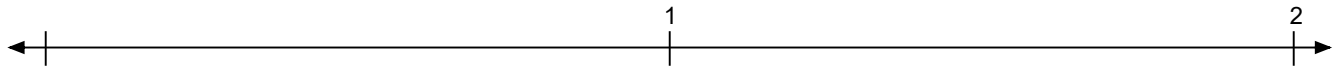
Name: _____

Date: _____

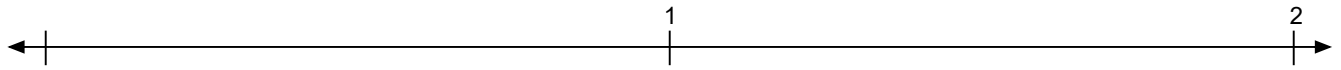
Number Line Decimal

Identify where each set of points should be placed on the number lines below.

1. 0,7 0,3 1,4 1,1



2. 0,2 0,7 1,8 1,6



3. 0,7 1,3 0,4 0,2



4. 0,6 0,8 1,1 0,3



5. 0 0,8 0,5 1,9



6. 1,7 0,6 0,3 0,9



7. 0,3 0,1 0,5 1,4



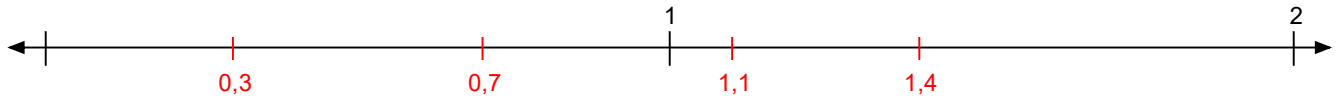
Name: _____

Date: _____

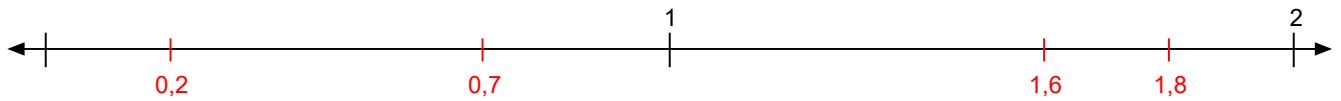
Number Line Decimal

Identify where each set of points should be placed on the number lines below.

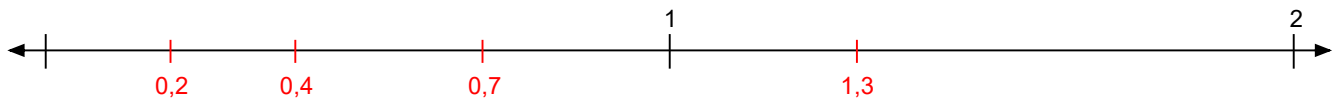
1. 0,7 0,3 1,4 1,1



2. 0,2 0,7 1,8 1,6



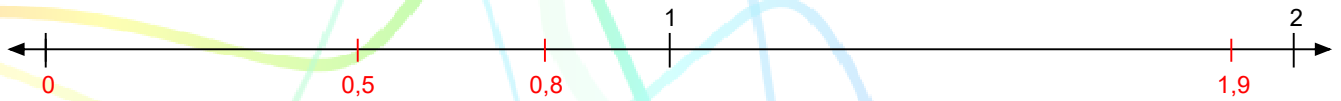
3. 0,7 1,3 0,4 0,2



4. 0,6 0,8 1,1 0,3



5. 0 0,8 0,5 1,9



6. 1,7 0,6 0,3 0,9



7. 0,3 0,1 0,5 1,4

