


Name: _____

Date: _____

Reading Digital Clock


Show the time for each clock.

1.




4:20

2.



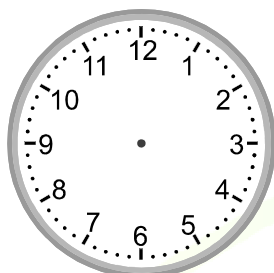
3:40

3.



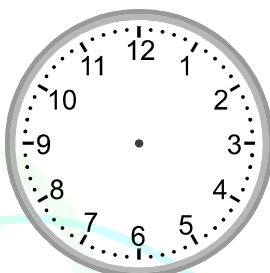
10:10

4.




1:20

5.



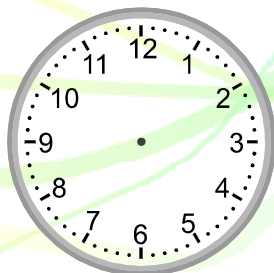
11:30

6.



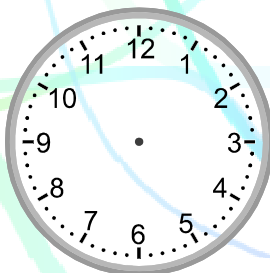
7:40

7.




9:30

8.



7:20

9.



4:40


Name: _____

Date: _____

Reading Digital Clock

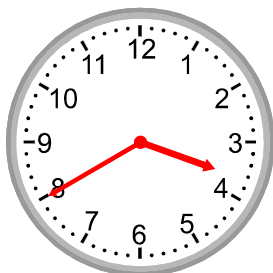
Show the time for each clock.

1.



4:20

2.



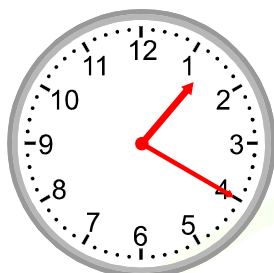
3:40

3.



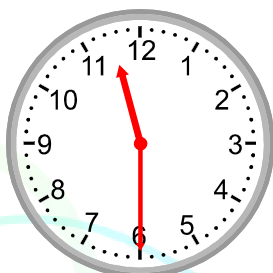
10:10

4.



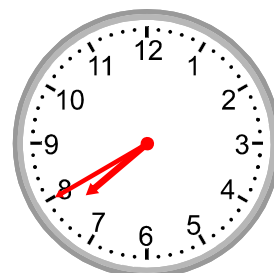
1:20

5.



11:30

6.



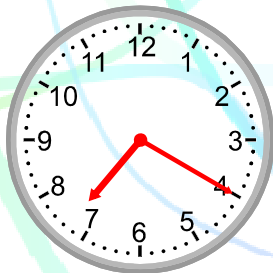
7:40

7.



9:30

8.



7:20

9.



4:40