


Name: _____

Date: _____

Time Passage


Draw the clock hands to show the passage of time.

1.




What time will it be in 5 hours 45 minutes?

2.




What time will it be in 3 hours 15 minutes?

3.




What time will it be in 2 hours 45 minutes?

4.




What time will it be in 4 hours 30 minutes?

5.



What time will it be in 5 hours 0 minutes?

6.



What time will it be in 2 hours 0 minutes?

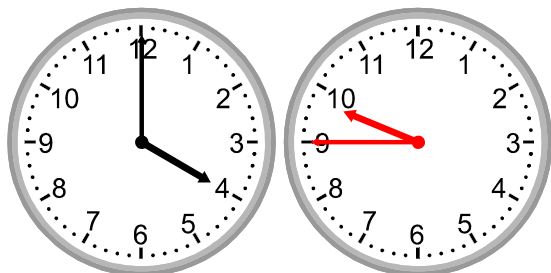
Name: _____

Date: _____

Time Passage

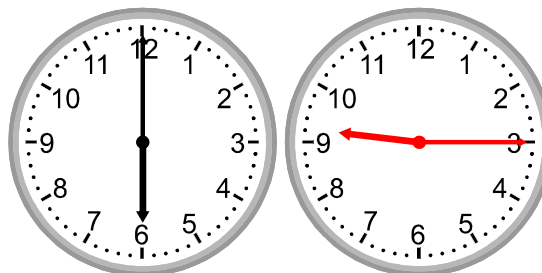
Draw the clock hands to show the passage of time.

1.




What time will it be in 5 hours 45 minutes?

2.




What time will it be in 3 hours 15 minutes?

3.




What time will it be in 2 hours 45 minutes?

4.




What time will it be in 4 hours 30 minutes?

5.



What time will it be in 5 hours 0 minutes?

6.



What time will it be in 2 hours 0 minutes?