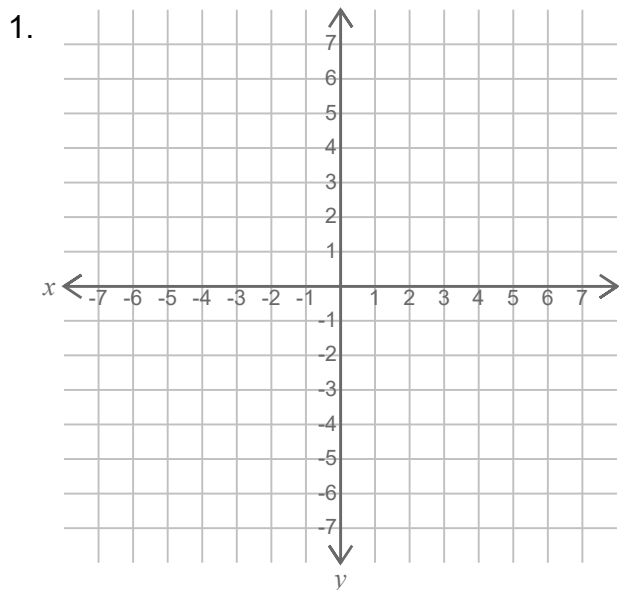


Name: _____

Date: _____

Cartesian Coordinates Line Plotting

Plot and draw the lines.

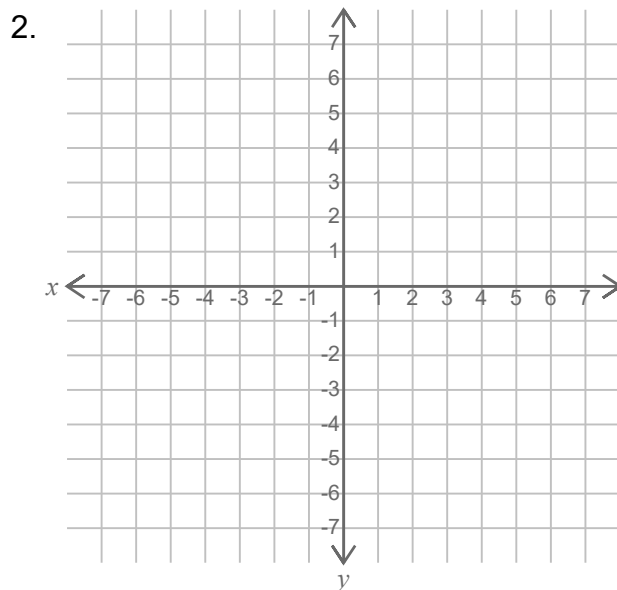


$A = (-4, -3)$

$B = (-6, -6)$

$C = (0, 3)$

$D = (2, 6)$



$A = (-4, 2)$

$B = (3, -5)$

$C = (-2, 0)$

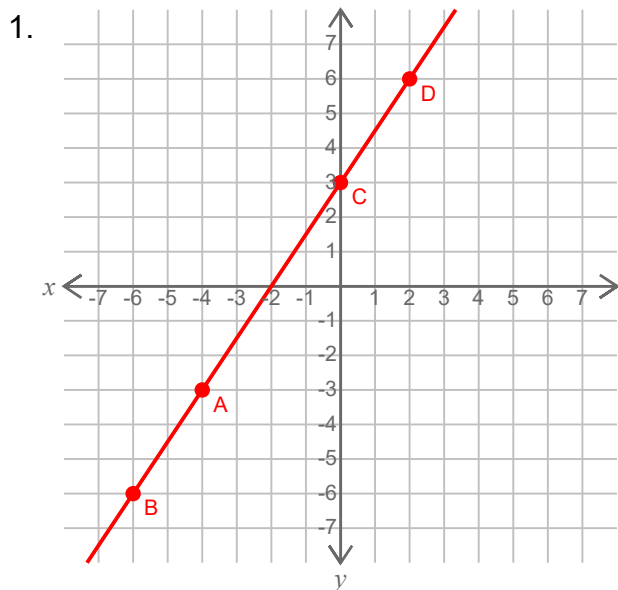
$D = (-6, 4)$

Name: _____

Date: _____

Cartesian Coordinates Line Plotting

Plot and draw the lines.

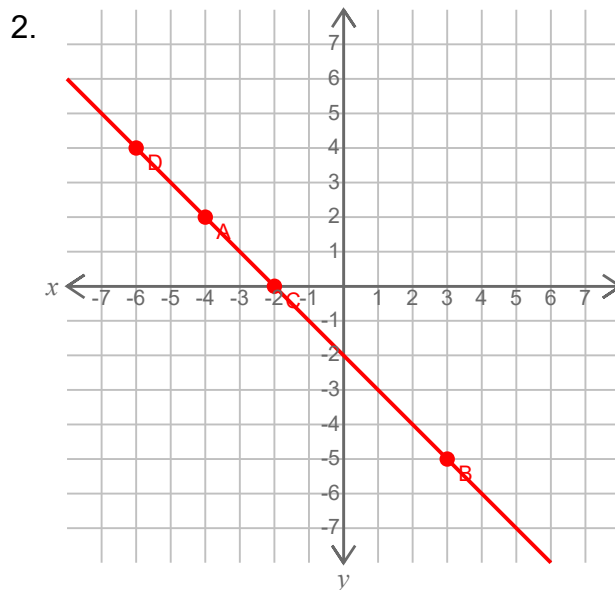


$A = (-4, -3)$

$B = (-6, -6)$

$C = (0, 3)$

$D = (2, 6)$



$A = (-4, 2)$

$B = (3, -5)$

$C = (-2, 0)$

$D = (-6, 4)$