

Name: _____

Date: _____

Fraction Identification From Rectangles

Color the fraction.

1. = _____
2. = _____
3. = _____
4. = _____
5. = _____
6. = _____
7. = _____
8. = _____
9. = _____
10. = _____

Color the fraction.

11. = _____
12. = _____
13. = _____
14. = _____
15. = _____
16. = _____
17. = _____
18. = _____
19. = _____
20. = _____

Color the fraction.


21. = _____
22. = _____
23. = _____
24. = _____
25. = _____
26. = _____
27. = _____
28. = _____
29. = _____
30. = _____


Name: _____


Date: _____

Fraction Identification From Rectangles


Color the fraction.

1.  = $\frac{1}{2}$ _____


2.  = $\frac{2}{3}$ _____


3.  = $\frac{1}{4}$ _____


4.  = $\frac{1}{2}$ _____

5.  = $\frac{1}{2}$ _____

6.  = $\frac{1}{3}$ _____


7.  = $\frac{1}{5}$ _____

8.  = $\frac{1}{6}$ _____


9.  = $\frac{2}{5}$ _____

10.  = $\frac{2}{3}$ _____


Color the fraction.


11.  = $\frac{1}{8}$ _____


12.  = $\frac{2}{3}$ _____

13.  = $\frac{4}{5}$ _____

14.  = $\frac{1}{2}$ _____


15.  = $\frac{1}{5}$ _____

16.  = $\frac{1}{2}$ _____

17.  = $\frac{4}{8}$ _____

18.  = $\frac{5}{8}$ _____


19.  = $\frac{1}{3}$ _____


20.  = $\frac{2}{3}$ _____


Color the fraction.


21.  = $\frac{2}{3}$ _____


22.  = $\frac{1}{2}$ _____

23.  = $\frac{3}{8}$ _____

24.  = $\frac{2}{5}$ _____


25.  = $\frac{3}{4}$ _____

26.  = $\frac{2}{5}$ _____

27.  = $\frac{4}{5}$ _____

28.  = $\frac{1}{4}$ _____

29.  = $\frac{1}{3}$ _____

30.  = $\frac{1}{2}$ _____