


Name: \_\_\_\_\_

Date: \_\_\_\_\_

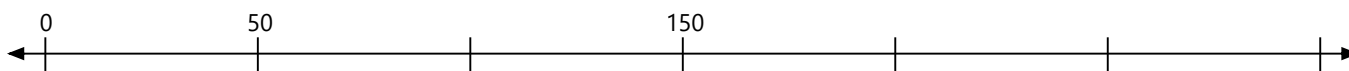
# Number Line Worksheet

Identify where each set of points should be placed on the number lines below.

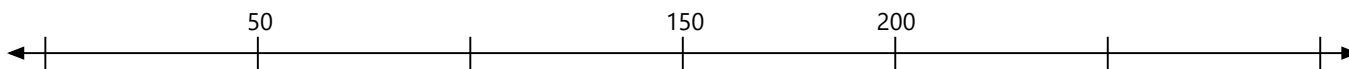
1. 270, 180, 90, 125, 55, 115, 40, 190, 105, 145




2. 35, 285, 30, 20, 140, 220, 90, 105, 135, 165




3. 250, 10, 85, 80, 270, 115, 15, 255, 180, 210



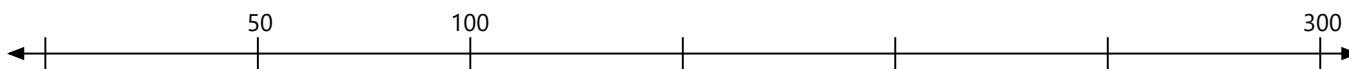
4. 180, 15, 215, 120, 65, 195, 140, 5, 175, 240



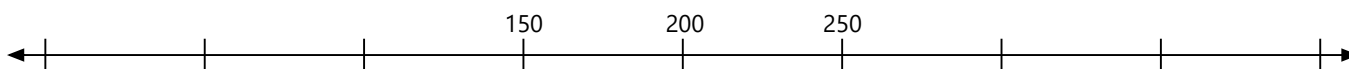
5. 125, 70, 130, 150, 10, 145, 105, 55, 45, 75




6. 285, 220, 125, 120, 150, 20, 200, 70, 270, 170



7. 130, 50, 35, 0, 360, 195, 170, 390, 100, 310



8. 155, 295, 255, 330, 275, 20, 90, 190, 15, 65



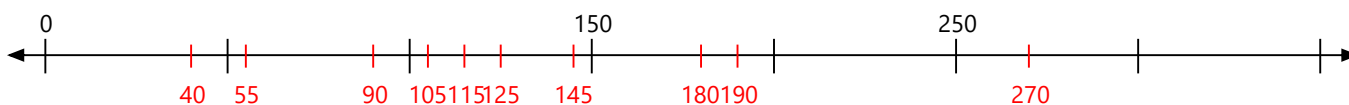
Name: \_\_\_\_\_

Date: \_\_\_\_\_

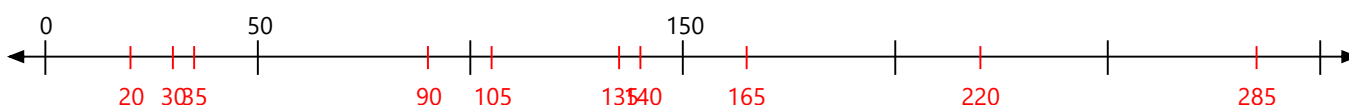
# Number Line Worksheet

Identify where each set of points should be placed on the number lines below.

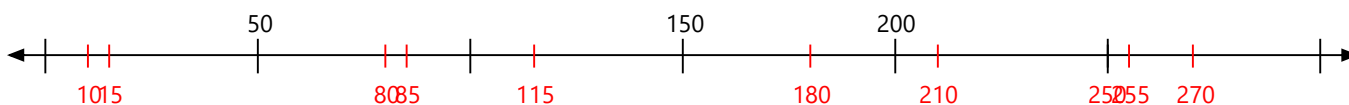
1. 270, 180, 90, 125, 55, 115, 40, 190, 105, 145



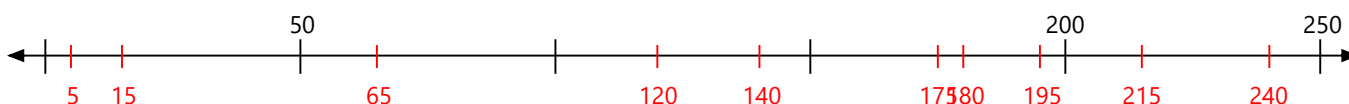
2. 35, 285, 30, 20, 140, 220, 90, 105, 135, 165



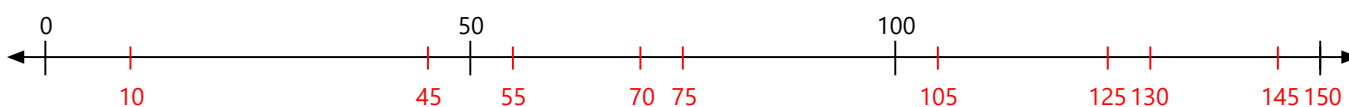
3. 250, 10, 85, 80, 270, 115, 15, 255, 180, 210



4. 180, 15, 215, 120, 65, 195, 140, 5, 175, 240



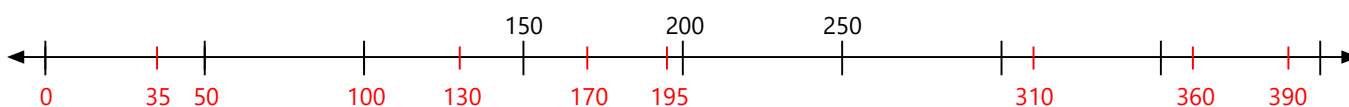
5. 125, 70, 130, 150, 10, 145, 105, 55, 45, 75



6. 285, 220, 125, 120, 150, 20, 200, 70, 270, 170



7. 130, 50, 35, 0, 360, 195, 170, 390, 100, 310



8. 155, 295, 255, 330, 275, 20, 90, 190, 15, 65

